


Name: _____


Assignment 9-3

Identify the following intervals.


1 2 3 4 5 6 7 8




9 10 11 12 13 14 15 16




17 18 19 20 21 22 23 24



25 26 27 28 29 30 31 32



33 34 35 36 37 38 39 40



41 42 43 44 45 46 47 48

