

Name: \_\_\_\_\_

**Assignment 7-1**

- 1) Draw a treble clef on each staff. Write all four forms of the ascending scales as directed below. For melodic minor, give both ascending and descending forms.

The four scales are: Major  
Natural Minor  
Harmonic Minor  
Melodic Minor (asc/desc)

**#1**

**G Major**

\_\_\_\_\_  
\_\_\_\_\_  
\_\_\_\_\_  
\_\_\_\_\_

**e natural minor**

\_\_\_\_\_  
\_\_\_\_\_  
\_\_\_\_\_  
\_\_\_\_\_

**e harmonic minor**

\_\_\_\_\_  
\_\_\_\_\_  
\_\_\_\_\_  
\_\_\_\_\_


**e melodic minor – ascending and descending**

\_\_\_\_\_  
\_\_\_\_\_  
\_\_\_\_\_  
\_\_\_\_\_


OVER →

**#2**


**A Major**




**f# natural minor**



**f# harmonic minor**




**f# melodic minor – ascending and descending**




**#3**


**E♭ Major**



**c natural minor**



**c harmonic minor**



**c melodic minor – ascending and descending**

