


Name: \_\_\_\_\_


**Assignment 5-3**

Write the following clefs and scales. Watch for ascending or descending instruction. Use accidentals instead of key signatures.


E Major (ascending, bass clef)




F Major (descending, treble clef)



C# Major (ascending, bass clef)



A Major (descending, treble clef)



E $\flat$  Major (ascending, bass clef)

