


Name: _____


Assignment 4-1

1) Write the following scales.


C Major, TREBLE clef, ascending




B \flat Major, BASS clef, ascending




A Major, TREBLE clef, DESCENDING



G Major, BASS clef, DESCENDING



2) Write the solfege under the following melody. Can you sing it with solfege?



3) Explain how each of the following terms or signs are interpreted in music.

da Capo _____

Coda _____

D.C. al Coda _____

⊕ _____

D.S. al Coda _____

⌘ _____

Fine _____