


Name: _____

Assignment 2-1

1. Draw a treble clef on the staff below and then write in the notes above the letter names. If there is more than one answer, give both (or all three!).

Draw treble clef




G B F D A C E

Draw these notes on the staff

2. Draw a **bass clef** on the staff below and then write in the notes above the letter names. If there is more than one answer, provide it.

Draw bass clef



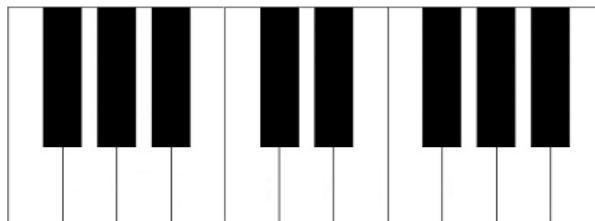
E B F C G D A

Draw these notes on the staff

3. **Simple Time** means: _____

4. **Compound Time** means: _____

5. Write in the letter names of the white notes on the mini keyboard below.



6. What do each of the following time signatures mean?

$\frac{4}{4}$ Four beats per measure and quarter note gets the beat

$\frac{2}{4}$ _____

$\frac{3}{4}$ _____

$\frac{6}{8}$ Two beats per measure and the dotted quarter gets the beat

$\frac{9}{8}$ _____


$\frac{12}{8}$ _____

7. Fill in the following by writing the notes for the division and the macrobeat.

Simple Time

 = _____ = _____
Macrobeat Division Subdivision

Compound Time

 = _____
Macrobeat Division