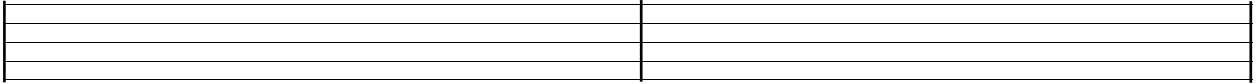


Name: \_\_\_\_\_

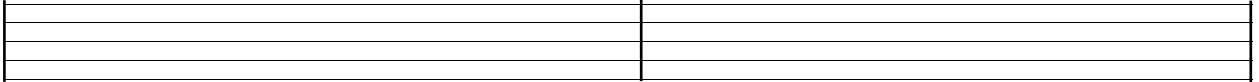
**Assignment 3-1**

Write all four forms of scales you have learned in the above sections. Begin by drawing the BASS clef for all staves below, then create each scale as prescribed:

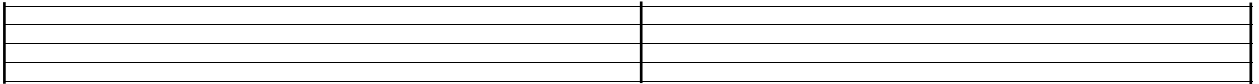
**C Major**

Two blank musical staves, each consisting of five horizontal lines, intended for writing the C Major scale.

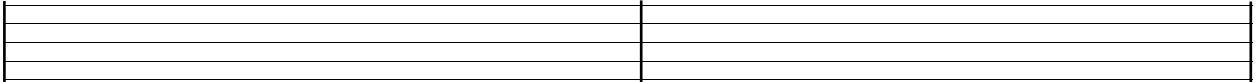
**a natural minor**

Two blank musical staves, each consisting of five horizontal lines, intended for writing the a natural minor scale.

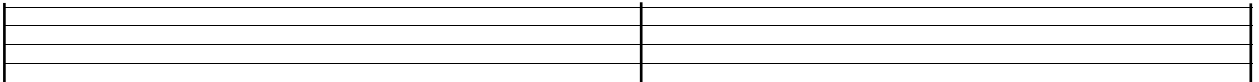
**a harmonic minor**

Two blank musical staves, each consisting of five horizontal lines, intended for writing the a harmonic minor scale.

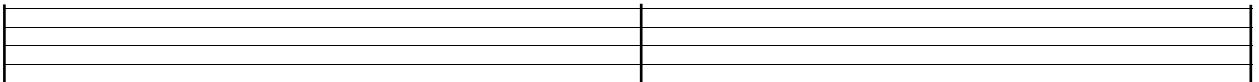
**a melodic minor**

Two blank musical staves, each consisting of five horizontal lines, intended for writing the a melodic minor scale.

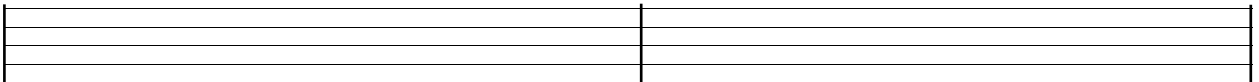
**F Major**

Two blank musical staves, each consisting of five horizontal lines, intended for writing the F Major scale.

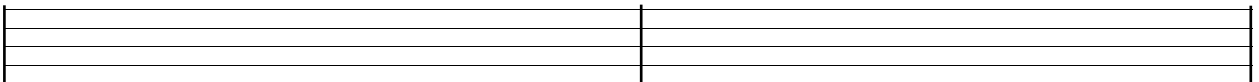
**d natural minor**

Two blank musical staves, each consisting of five horizontal lines, intended for writing the d natural minor scale.


**d harmonic minor**

Two blank musical staves, each consisting of five horizontal lines, intended for writing the d harmonic minor scale.

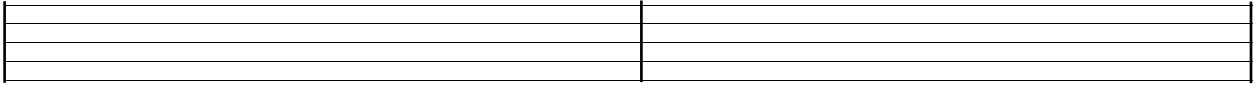
**d melodic minor**

Two blank musical staves, each consisting of five horizontal lines, intended for writing the d melodic minor scale.


**E<sup>b</sup> Major**



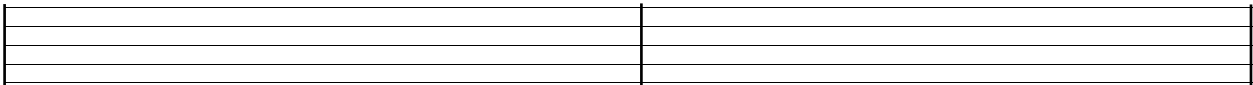
**c natural minor**




**c harmonic minor**




**c melodic minor**




**B Major**



**g# natural minor**



**g# harmonic minor**



**g# melodic minor**

