


Name: _____

Assignment 3-2

Build the following scales (choose a clef and draw it in).


Treble clef: C – Dorian, ascending

Bb – Phrygian, descending




Bass clef: E – Mixolydian, ascending

B – Lydian, descending




Treble clef: C# - Dorian, ascending

D – Phrygian descending




Bass clef: A – Mixolydian, ascending

F – Lydian, descending



Treble clef: E – Dorian, ascending

G – Phrygian, descending



Bass clef: F# - Mixolydian, ascending

Db – Lydian, descending

